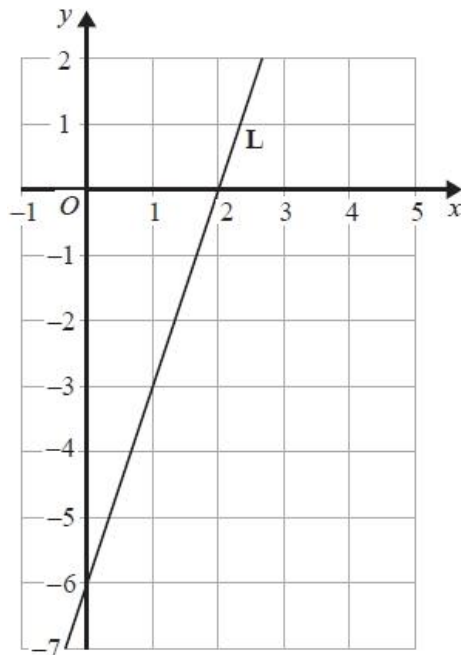


A075 Straight line graphs 1

Q1.

The line **L** is shown on the grid.

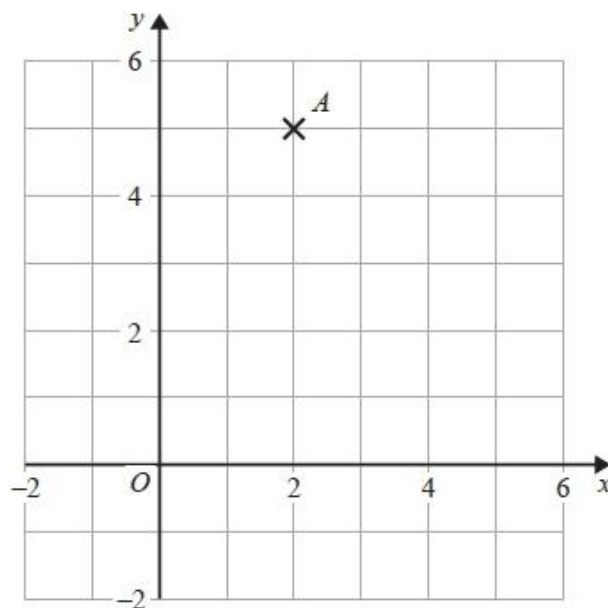


Find an equation for **L**.

.....
(Total for question = 3 marks)

Q2.

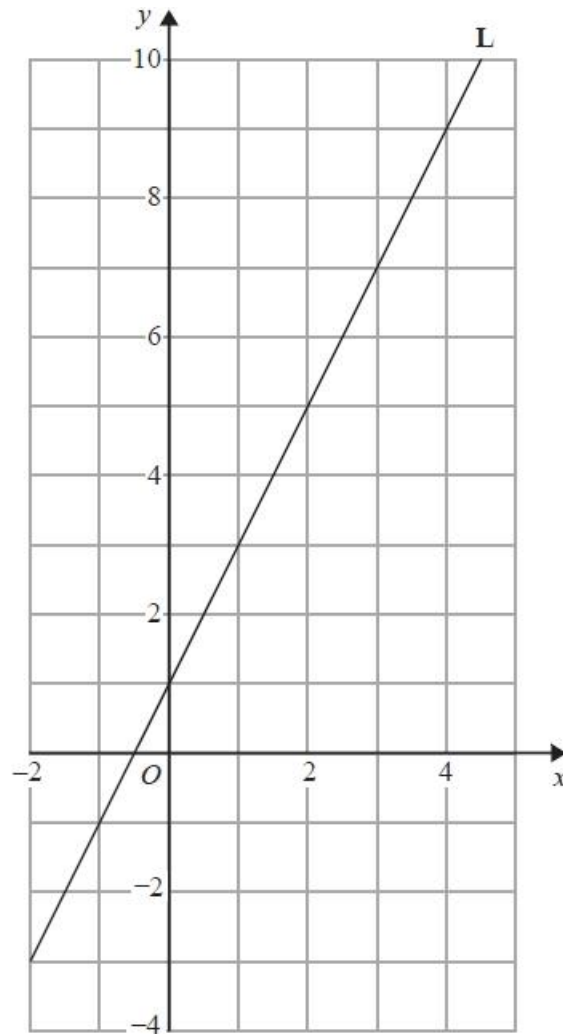
Find an equation of the straight line with gradient 3 that passes through point A.



(Total for question = 2 marks)

Q3.

Line **L** is drawn on the grid below.



Find an equation for the straight line **L**.
Give your answer in the form $y = mx + c$

.....
(Total for question is 3 marks)

Q4.

A is the point with coordinates $(5, 9)$

B is the point with coordinates $(d, 15)$

The gradient of the line AB is 3

Work out the value of d .

.....
(Total for question = 3 marks)

Q5.

A is the point with coordinates $(2, 10)$

B is the point with coordinates $(5, d)$

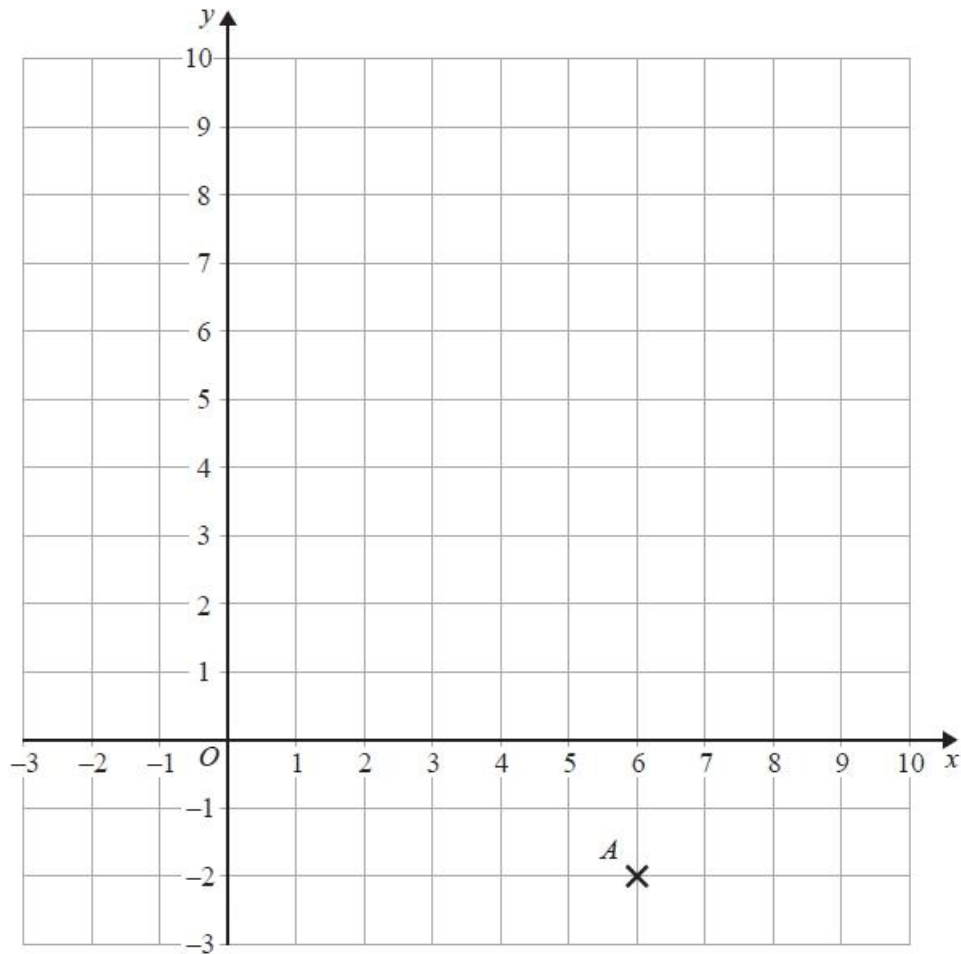
The gradient of the line AB is 4

Work out the value of d .

$d = \dots\dots\dots$

(Total for question = 3 marks)

Q6.



(a) Write down the coordinates of the point *A*.

(..... ,)

(1)

(b) (i) Plot the point with coordinates (2, 9).

Label this point *B*.

(1)

(ii) Does point *B* lie on the straight line with equation $y = 4x + 1$?

You must show how you get your answer.

.....
.....

(1)

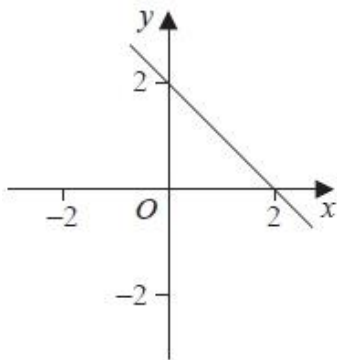
(c) On the grid, draw the line with equation $x = -2$

(1)

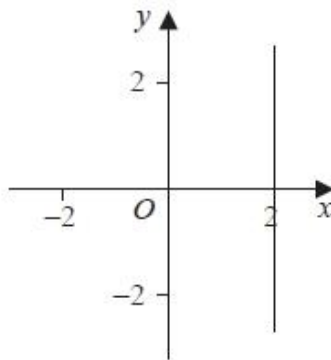
(Total for question = 4 marks)

Q7.

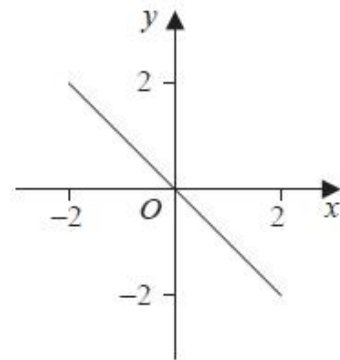
Here are six straight line graphs.



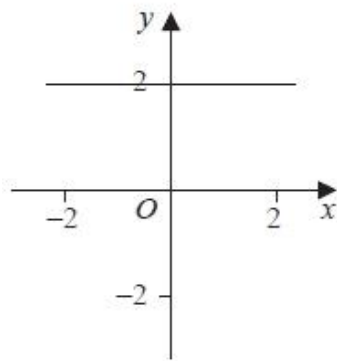
Graph A



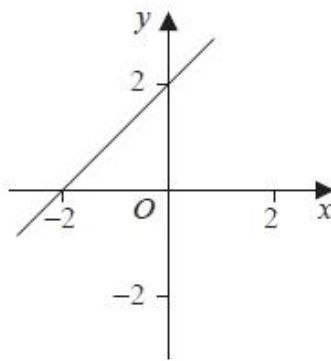
Graph B



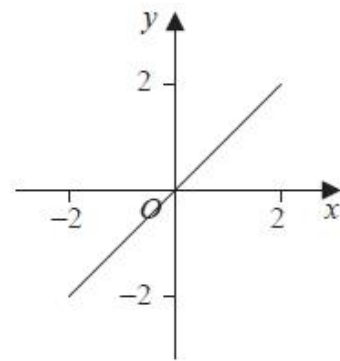
Graph C



Graph D



Graph E



Graph F

Match each equation in the table to the correct graph.
Write the letter of the graph in the table.

Equation	Graph
$y = 2$	
$y = x$	
$x + y = 2$	

(Total for question = 2 marks)

Q8.

Here are the equations of four straight lines.

Line A $y = 2x + 4$

Line B $2y = x + 4$

Line C $2x + 2y = 4$

Line D $2x - y = 4$

Two of these lines are parallel.

Write down the two parallel lines.

Line and line

(Total for question is 1 mark)

Q9.

The equation of the line L_1 is $y = 3x - 2$

The equation of the line L_2 is $3y - 9x + 5 = 0$

Show that these two lines are parallel.

(Total for question = 2 marks)