

N224 Compound measures 1

Q1.

Bronwin works in a restaurant.

The table gives her rates of pay.

Day	Rate of pay
Monday to Friday	£8.40 per hour
Weekend	£11.20 per hour

Bronwin worked for a total of 20 hours last week.

She worked 8 of these 20 hours at the weekend.

Show that Bronwin was paid less than £200 last week.

(Total for question = 3 marks)

Q2.

Sean works for a company.

His normal rate of pay is £12 per hour.

When Sean works more than 8 hours a day, he is paid overtime for each hour he works more than 8 hours.

Sean's rate of overtime pay per hour is $1\frac{1}{4}$ times his normal rate of pay per hour.

On Monday Sean worked for 10 hours.

Work out the total amount of money Sean earned on Monday.

£

(Total for question = 4 marks)

Q3.

Emily drives 186 miles in 3 hours.

(a) What is her average speed?

..... mph
(2)

Sarah drives at an average speed of 58 mph for 4 hours.

(b) How many miles does Sarah drive?

..... miles
(2)

(Total for question = 4 marks)

Q4.

A train travels from Madrid to Malaga at an average speed of 183 km/h.

The train leaves Madrid at 08 40

The train arrives at Malaga at 11 28

Work out the distance the train travels from Madrid to Malaga.

..... km

(Total for question = 3 marks)

Q5.

A car travels for 18 minutes at an average speed of 72 km/h.

(a) How far will the car travel in these 18 minutes?

..... km
(2)

David says,

"72 kilometres per hour is faster than 20 metres per second."

(b) Is David correct?

You must show how you get your answer.

(2)

(Total for question = 4 marks)

Q6.

A plane travels at a speed of 213 miles per hour.

(a) Work out an estimate for the number of seconds the plane takes to travel 1 mile.

..... seconds
(3)

(b) Is your answer to part (a) an underestimate or an overestimate?
Give a reason for your answer.

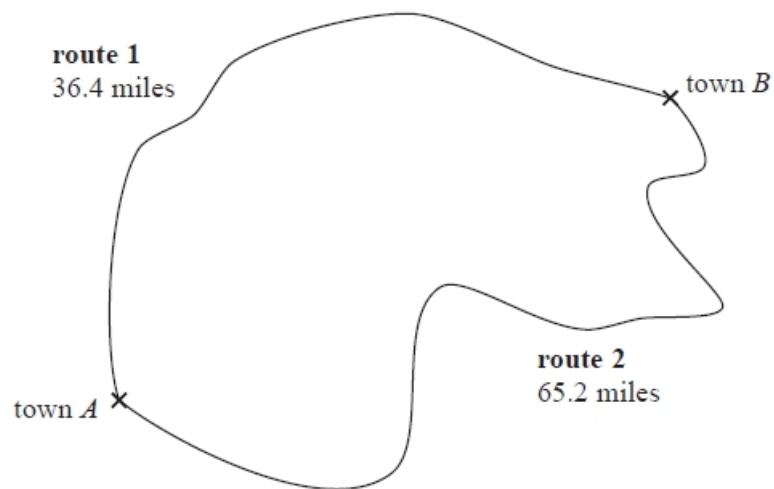
.....
.....

(1)

(Total for question = 4 marks)

Q7.

Eric and Geraldine both drove from town *A* to town *B*.



Both Eric and Geraldine left town *A* at 2 pm.

Eric drove on route 1

He got to town *B* at 2 48 pm.

Geraldine drove on route 2

She got to town *B* at 3 25 pm.

Who drove at the greater average speed?

You must show all your working.

(Total for question = 3 marks)

Q8.

Nimer was driving to a hotel.
He looked at his Sat Nav at 13 30

Time	13 30
Distance to destination	65 miles

Nimer arrived at the hotel at 14 48

Work out the average speed of the car from 13 30 to 14 48
You must show all your working.

..... mph

(Total for question = 4 marks)

Q9.

A cycle race across America is 3069.25 miles in length.

Juan knows his average speed for his previous races is 15.12 miles per hour.

For the next race across America he will cycle for 8 hours per day.

(a) Estimate how many days Juan will take to complete the race.

.....

(3)

Juan trains for the race.

The average speed he can cycle at increases.

It is now 16.27 miles per hour.

(b) How does this affect your answer to part (a)?

.....
.....

(1)

(Total for question = 4 marks)

Q10.

Regan cycles 78 miles in 6 hours.

His average speed for the first 30 miles is 15 miles per hour.

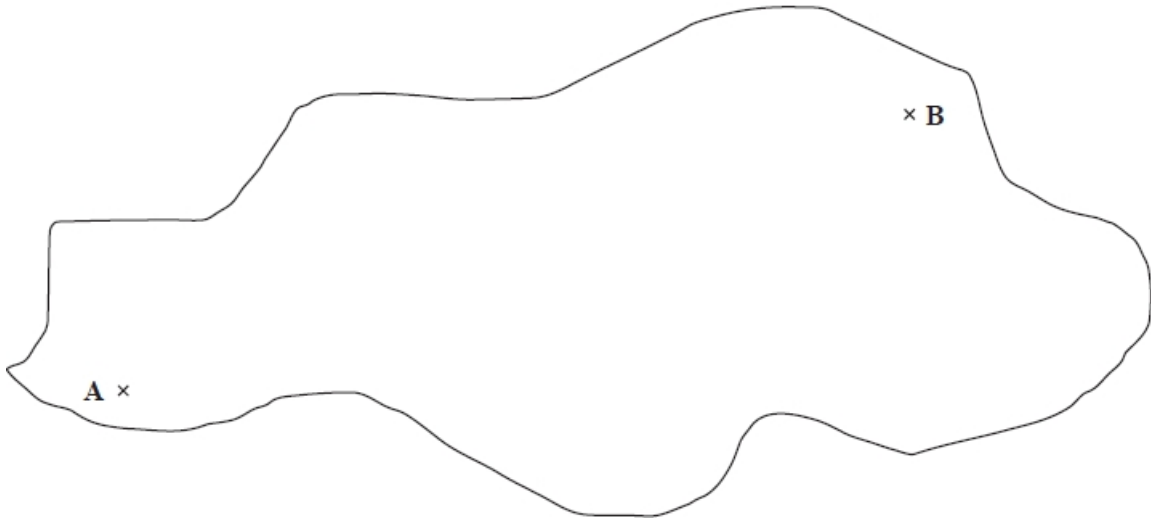
Work out Regan's average speed for the last 48 miles.

..... miles per hour

(Total for question = 3 marks)

Q11.

The map shows two airports, **A** and **B**.



Scale: 1 cm to 100 km

A plane flies directly from **A** to **B**.

The average speed of the plane is 300 km/h.

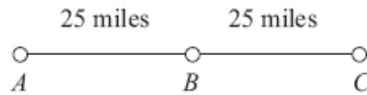
How long does the plane take to fly from **A** to **B**?

You must show all your working.

..... hours

(Total for Question is 3 marks)

Q12.



A, *B* and *C* are 3 service stations on a motorway.

$AB = 25$ miles

$BC = 25$ miles

Aysha drives along the motorway from *A* to *C*.

Aysha drives at an average speed of 50 mph from *A* to *B*.

She drives at an average speed of 60 mph from *B* to *C*.

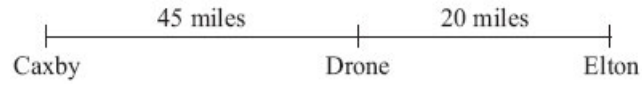
Work out the difference in the time Aysha takes to drive from *A* to *B* and the time Aysha takes to drive from *B* to *C*.

Give your answer in minutes.

.....
(Total for Question is 3 marks)

Q13.

The distance from Caxby to Drone is 45 miles.
The distance from Drone to Elton is 20 miles.



Colin drives from Caxby to Drone.
Then he drives from Drone to Elton.

Colin drives from Caxby to Drone at an average speed of 30 mph.
He drives from Drone to Elton at an average speed of 40 mph.

Work out Colin's average speed for the whole journey from Caxby to Elton.

.....
(Total for Question is 3 marks)

Q14.

Judy drives at an average speed of 80 km per hour for 2 hours 45 minutes.

Work out the number of **miles** Judy drives.

..... miles

(Total for Question is 3 marks)

Q15.

A plane takes 30 seconds to fly a distance of 8 kilometres.

Work out the average speed of the plane, in miles per hour.

..... miles per hour

(Total for Question is 3 marks)

Q16.

Harry travels from Appleton to Brockley at an average speed of 50 mph.
He then travels from Brockley to Cantham at an average speed of 70 mph.

Harry takes a total time of 5 hours to travel from Appleton to Cantham.
The distance from Brockley to Cantham is 210 miles.

Calculate Harry's average speed for the total distance travelled from Appleton to Cantham.

.....mph

(Total for Question is 4 marks)